



### Multiplying Decimals

1.) 
$$\begin{array}{r} 13.3 \\ \times 4 \\ \hline \end{array}$$

2.) 
$$\begin{array}{r} 2.09 \\ \times 8 \\ \hline \end{array}$$

3.) 
$$\begin{array}{r} 77.8 \\ \times 9 \\ \hline \end{array}$$

4.)  $23 \times 7.1$

5.)  $22 \times 9.9$

6.)  $45.83 \times 12.1$

### Fractions

Write each mixed number as an improper fraction and each improper fraction as a mixed number.

1.)  $\frac{34}{8}$

2.)  $\frac{24}{5}$

3.)  $\frac{30}{9}$

Write each fraction in simplest form

1.)  $\frac{12}{15}$

2.)  $\frac{10}{18}$

3.)  $\frac{3}{8}$

### Adding Fractions

1.)  $\frac{5}{7} + \frac{1}{7}$

2.)  $\frac{5}{12} + \frac{11}{12}$

3.)  $2\frac{1}{2}$   
 $+ 1\frac{1}{2}$   

---

 $2$

### Subtracting Fractions

1.)  $2\frac{3}{4}$   
 $- 5\frac{1}{4}$   

---

 $4$

2.)  $7$   
 $- 3\frac{2}{8}$   

---

 $8$

3.)  $5$   
 $- 3\frac{5}{6}$   

---

 $6$

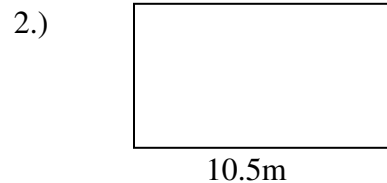
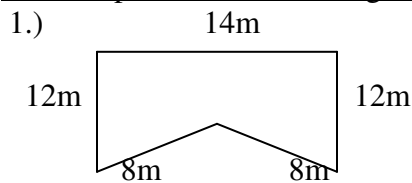
### Multiplying Fractions

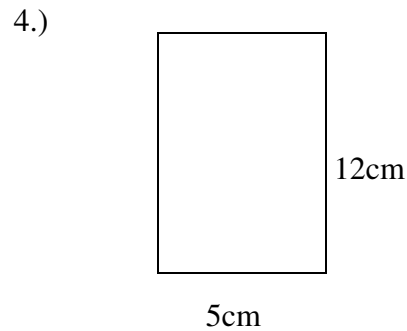
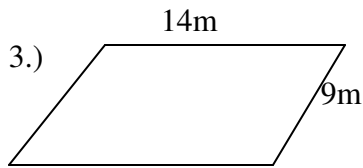
1.)  $\frac{5}{8} \times 1\frac{3}{5}$

2.)  $\frac{4}{5} \times \frac{2}{5}$

### Perimeter

Find the perimeter of each figure





### Percents, Decimals, and Fractions

Write each percent as a decimal and as a fraction

- 1.) 40%
- 2.) 88%
- 3.) 200%
- 4.) 85%
- 5.) 1%

### Problem Solving

Answer each of the problems

1. Rosa wrote 17 postcards, Tara wrote twice as many. How many postcards did Tara write?
2. Kari is buying sheets of stamps. If she buys 8 sheets of 36 stamps and 4 sheets of 16 stamps, how many stamps did she have altogether?
3. Cara spends 15 minutes more each week than the week before on her newspaper project. If she works 45 minutes the first week, how long will she work the fourth week?
4. Tia bought a CD for \$13.99 and a pair of shoes for \$21.99. How much money did Tia spend?